

Name _____

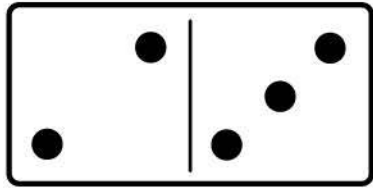
Date _____

Adding Dominos


Count the dots in the left half of the Dominos and write it down below it.

Then count the dots in the right half of the dominos and write it below it


Then count all the dots together in the set and write it down in the box.




$$\underline{\quad} + \underline{\quad} = \square$$



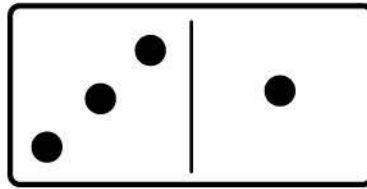
$$\underline{\quad} + \underline{\quad} = \square$$




$$\underline{\quad} + \underline{\quad} = \square$$




$$\underline{\quad} + \underline{\quad} = \square$$



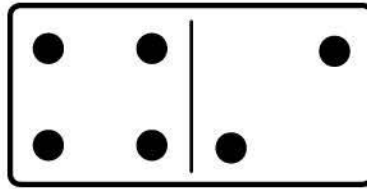
$$\underline{\quad} + \underline{\quad} = \square$$




$$\underline{\quad} + \underline{\quad} = \square$$



$$\underline{\quad} + \underline{\quad} = \square$$



$$\underline{\quad} + \underline{\quad} = \square$$



$$\underline{\quad} + \underline{\quad} = \square$$